



PAMIBIA UNIVERSITY
OF SCIENCE AND TECHNOLOGY
FACULTY OF COMPUTING AND INFORMATICS
DEPARTMENT OF INFORMATICS

QUALIFICATION : BACHELOR OF INFORMATICS	
COURSE NAME: PRINCIPLES AND APPLICATION OF INFORMATICS	COURSE CODE: PAI621s
QUALIFICATION CODE: 07BAIT	LEVEL: 6
SESSION: NOVEMBER 2022	PAPER: THEORY
DURATION: 3 HOURS	MARKS: 80

FIRST OPPORTUNITY EXAMINATION QUESTION PAPER	
EXAMINER(S)	Dr Irja Shaanika
MODERATOR	Ms Albertina Shilongo

INSTRUCTIONS
<ol style="list-style-type: none">1. Answer ALL the questions on the answer scripts provided.2. For section A, write only the letter of the answer3. Write clearly and neatly.4. Number the answers clearly.

PERMISSIBLE MATERIALS
<ol style="list-style-type: none">1. Calculator.

THIS QUESTION PAPER CONSISTS OF 6 PAGES
(Excluding this front page)

Section A: Multiple Choice Questions

[15 marks]

1. Applying for a travelling visa, is an example of which business process type? [1 mark]
 - A. Issue-to-resolution
 - B. Application-to-approval
 - C. Procure-to-pay
 - D. Order-to-cash

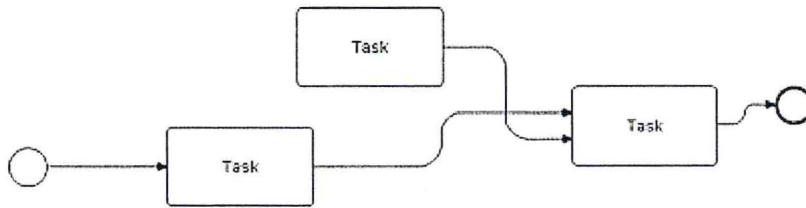
2. Which stage of business process evolution were the consumers and producers of a given good often the same persons? [1 mark]
 - A. Prehistoric times
 - B. Ancient times
 - C. Middle Ages:
 - D. Industrial Revolution:

3. The output of the process identification phase is a _____. [1 mark]
 - A. Designation
 - B. Evaluation Phase
 - C. Process Architecture
 - D. Root Cause Analysis

4. The secondary activity in Porter Value Chain dealing with the acquisition of inputs or resources is said to be. [1 mark]
 - A. Procurements
 - B. Resources management
 - C. Infrastructure
 - D. Development

5. In Business Process Modeling Notation (BPMN), which is true about an association? [1 mark]
 - A. Data descriptions between two Messages are connected to the same pool with an event object as input to or an output from an activity.
 - B. Information structures exist between two Flow Objects
 - C. Artifacts are associated with Activities and Control Objects to show that an event object is either an input to or an output from an activity
 - D. A directional Association is often used with Data Objects to show that a Data Object is either an input to or an output from an activity

6. What is wrong with the Business Process Modeling Notation (BPMN) diagram below? [1 mark]



- A. The sequence flow starts with an end event
- B. The sequence flow starts with an intermediate event
- C. An activity starts without a sequence flow
- D. The activity has no attached intermediate event

7. The gateway controls which aspect of a business process? [1 mark]

- A. Divergence and convergence
- B. The message
- C. The sequence and message flow
- D. The data

8. How do you indicate that the sub-process is being invoked? [1 mark]

- A. Use a collapsed sub-process activity with a thicker border
- B. Use expanded sub-process activity with a thicker border
- C. Use collapsed and sub-process activity with a thin border
- D. Use collapsed and sub-process activity with a thicker border

9. Which stage of process discovery provides the basis for the definition of pools and lanes? [1 mark]

- A. Identify the process boundaries
- B. Identify activities and events
- C. Identify resources and their handovers
- D. Identify the control flow

10. Why is it important to identifying patterns in the information provided by domain experts? [1 mark]

- A. Patterns can be utilized for constructing parts of a process model
- B. Models have to look nice to be engaging to a wide audience
- C. order to progress with the project, it is important to have a short and precise set of working hypotheses
- D. They will be useful when designing resources and handovers

11. The following is a disadvantage for which methods: the models resulting from process mining may not be directly understandable. [1 mark]
- A. Observation
 - B. Automatic process discovery
 - C. Document analysis
 - D. Interview based
12. A step that is required due for the regulatory environment of the business is called? [1 mark]
- A. Business Value-adding
 - B. Non-value adding
 - C. Value –adding
 - D. Environment value adding
13. To understand the cause of process defects one need to do: [1 mark]
- A. Root cause analysis
 - B. Waste elimination analysis
 - C. Defects analysis
 - D. Non value adding analysis
14. Factors related to a wrong assessment or an incorrectly performed step is discussed under which 6Ms? [1 mark]
- A. Milieu
 - B. Man
 - C. Method
 - D. Material
15. A domain expert is any individual who has intimate knowledge about how a process or activity is performed. Which of the individual below cannot be a domain expert? [1 mark]
- A. Process owner
 - B. Process manager
 - C. Process supplier
 - D. Process analyst

Section B: Structured Questions

[37 marks]

Question1: Briefly explain how the Gartner Hype cycle helps organisations with their technology investments decisions. [5 marks]

Question2: Explain how the process are managed and documented in the first three phases of the Capability Maturity Model Integrated (CMMI) framework. [6 marks]

- a. Level 1 (Initial):
- b. Level 2 (Managed):
- c. Level 3 (Defined):

Question3: As a process modeller, explain when it is appropriate to use: [5 marks]

- (a) Sub-process:
- (b) Process re-use

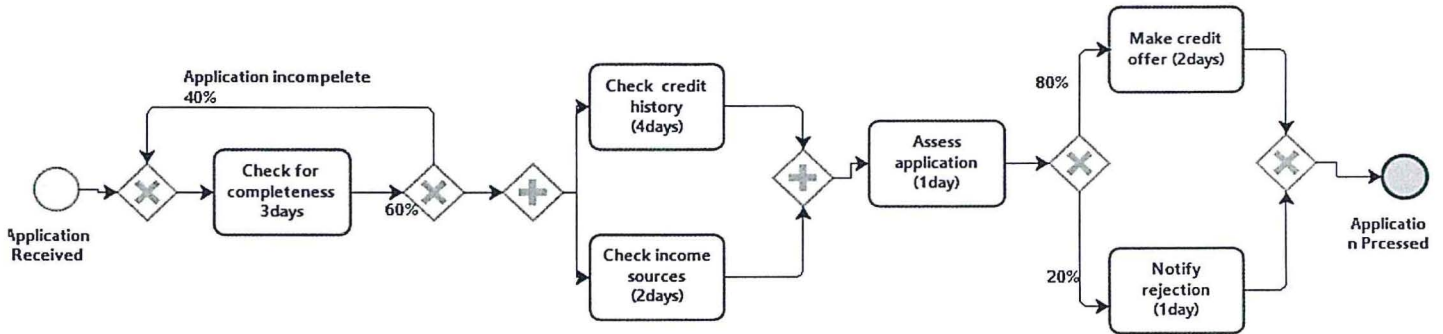
Question 4: Discuss some of the implications of having domain knowledge and modelling knowledge in different persons in an organisation. [9 marks]

Question 5: Discuss some of the limitations that the process analyst may encounter when gathering information about a process using the documentation technique. [8 marks]

Section C: Practical Based Questions

[28 marks]

Question1: Calculate the cycle time for the above process. Clearly illustrates the steps of your calculation. **[8 marks]**





Question 2: Model the following fragment of a business process for assessing loan applications.

[10 marks]

Once a loan application has been approved by the loan provider, an acceptance pack is prepared and sent to the customer. The acceptance pack includes a repayment schedule, which the customer needs to agree upon by sending the signed documents back to the loan provider. The latter then verifies the repayment agreement: if the applicant disagreed with the repayment schedule, the loan provider cancels the application; if the applicant agrees, the loan provider approves the application. In either case, the process completes with the loan provider notifying the applicant of the application status.

Question 10: The table below consist of various symbols used in business process modelling projects. Name the symbol and describe their role in a process modelling exercise. **[10 marks]**

No.	Symbol	Symbol name and description
A		
B		
C		

D		
E		

The end

